

# **2nd Grade Homework: 11/17 - 11/20**

**Name:** \_\_\_\_\_

## **Monday, 11/17:**

- (1) Math - The Last Digits**
- (2) ELA - Adjectives**
- (3) Science - The Changing Landscape P35**
- (4) Social Studies - Write about what you know about Native Americans**

## **Tuesday, 11/18:**

- (1) Math - Practice 2-Digit Subtraction**
- (2) ELA - Adjectives**
- (3) Social Studies - From Beehive to Breakfast Table**

## **Wednesday, 11/19:**

- (1) Math - Place Value Equivalences**
- (2) ELA - Writing Titles**

## **Thursday, 11/20:**

- (1) Math - Word Problems**
- (2) ELA - Fiction and Nonfiction Text**

## **Announcements:**

**\*\*Please read and log for fifteen minutes each day.**

**\*\*Please complete the story retell worksheet for one day this week.**



Name \_\_\_\_\_

COMMON CORE STANDARD CC.2.NBT.5  
Use place value understanding and properties of operations to add and subtract.

# The Lost Digits

Some digits fell out of these subtraction problems.

Put them back where they belong.

Write the correct digit in each box.

**Monday**

1.


Tens	Ones
4	8
1	<input type="text"/>
3	4

2.

Tens	Ones
2	5
<del>3</del>	<del>5</del>
1	<input type="text"/>
1	6

3.

Tens	Ones
7	8
<input type="text"/>	6
2	2



4.

Tens	Ones
<input type="text"/>	8
<del>4</del>	<del>8</del>
<input type="text"/>	9
2	9

5.

Tens	Ones
4	<input type="text"/>
1	1
3	1

6.

Tens	Ones
2	8
1	<input type="text"/>
1	0




**Writing and Reasoning** How did you decide which digit to use in Exercise 6?

---



---





# Adjectives

Underline or circle the adjectives in each sentence.

1. The large tree was cut down.
2. Five cute kittens ran across the carpet.
3. He wore his new shoes to school.
4. The birds flew in the blue sky.
5. She likes to eat sweet food.
6. There was yummy cake at the party.
7. Mary had blue eyes.



Illustrate a picture of a body of water and describe the direction of the water flow.

Monday





Monday

(4) Social Studies - Write about what you know about Native Americans.



COMMON CORE STANDARD CC.2.NBT.5

Use place value understanding and properties of operations to add and subtract

# Practice 2-Digit Subtraction

**Tuesday**

Clay scored 80 points. Meg scored 61 points.  
How many more points did Clay score than Meg?

**STEP 1**

More ones are needed.  
Regroup 8 tens 0 ones  
as 7 tens 10 ones.

7	10
8	0
- 6	1
<hr/>	

**STEP 2**

Subtract in the  
ones column.

7	10
8	0
- 6	1
<hr/>	
	9

**STEP 3**

Subtract in the  
tens column.

7	10
8	0
- 6	1
<hr/>	
1	9

**Write the difference.**

1.

$$\begin{array}{r} 60 \\ - 27 \\ \hline \end{array}$$

2.

$$\begin{array}{r} 37 \\ - 22 \\ \hline \end{array}$$

3.

$$\begin{array}{r} 61 \\ - 48 \\ \hline \end{array}$$

4.

$$\begin{array}{r} 70 \\ - 26 \\ \hline \end{array}$$

5.

$$\begin{array}{r} 37 \\ - 19 \\ \hline \end{array}$$

6.

$$\begin{array}{r} 55 \\ - 14 \\ \hline \end{array}$$



Name: \_\_\_\_\_

Date: \_\_\_\_\_



# Tuesday

## Adjectives



Add adjectives to up level the sentences.

1. James' homework was not very \_\_\_\_\_.
2. The \_\_\_\_\_ athlete lay on the floor.
3. The building's stairs are too \_\_\_\_\_.
4. Celia has a \_\_\_\_\_ decorated notebook.
5. I was not \_\_\_\_\_ with the way things went.
6. The \_\_\_\_\_ crowd encouraged the players.
7. Your words are very \_\_\_\_\_.
8. Tomorrow is going to be a \_\_\_\_\_ day.
9. Charles's \_\_\_\_\_ sweater is missing .
10. Dylan's father has a \_\_\_\_\_ suitcase.






Name \_\_\_\_\_ Date \_\_\_\_\_



# CHART AND GRAPH SKILLS

## From Beehive to Breakfast Table



Write sentences to tell what is happening in the steps.  
The first one is done for you.

Bees make honey.




---

---

---

---

---

---

---

---

---

---

© Harcourt

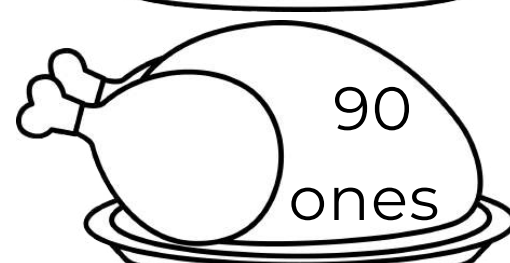
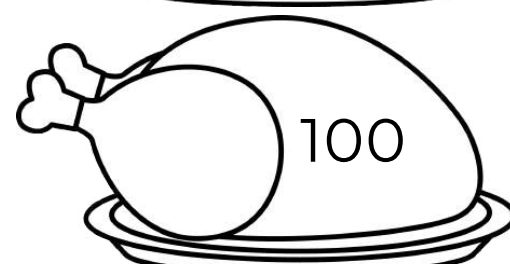
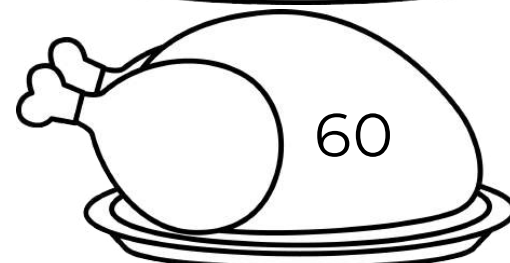
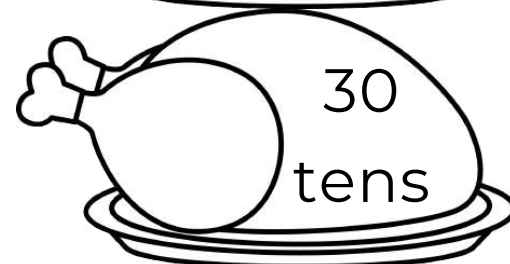
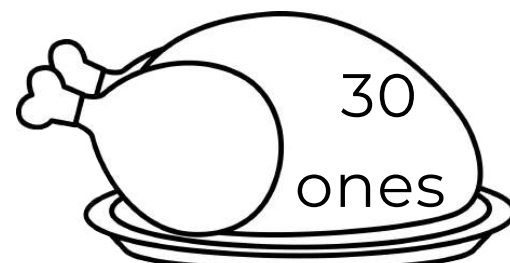
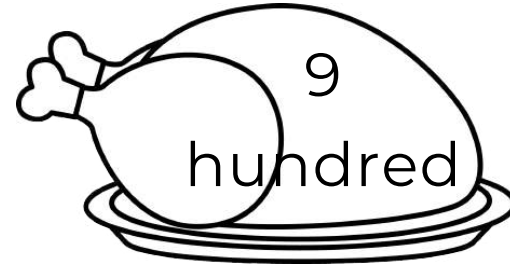
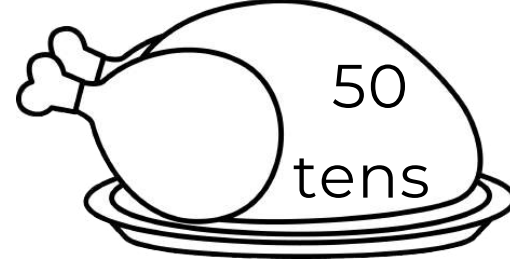
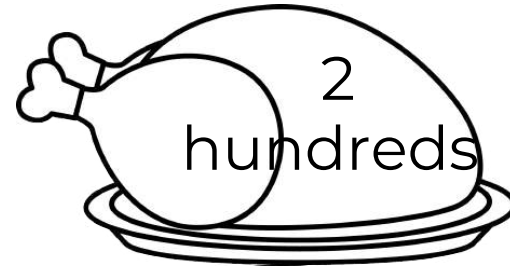
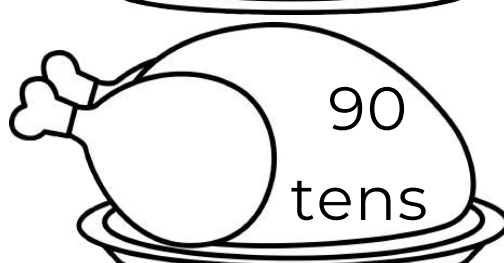
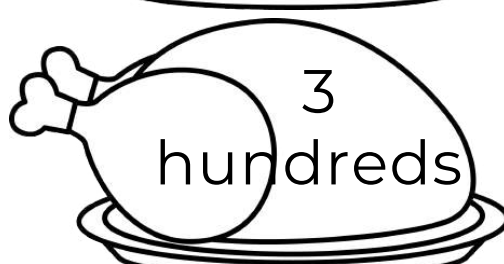
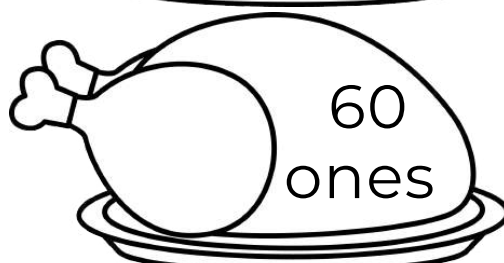
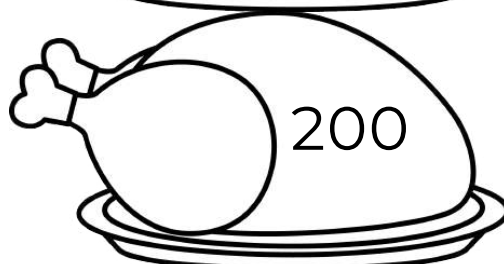
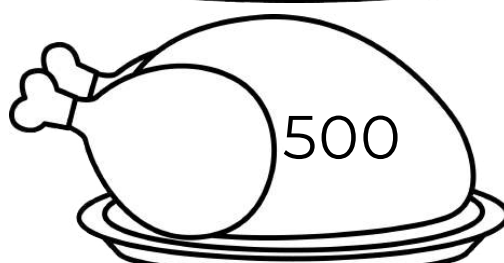
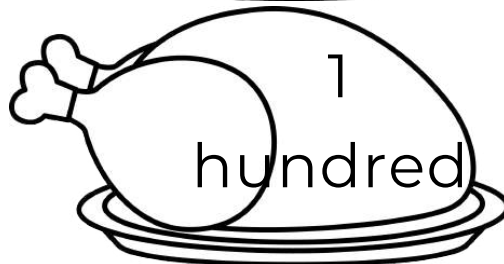

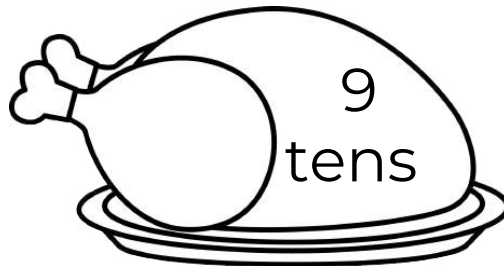
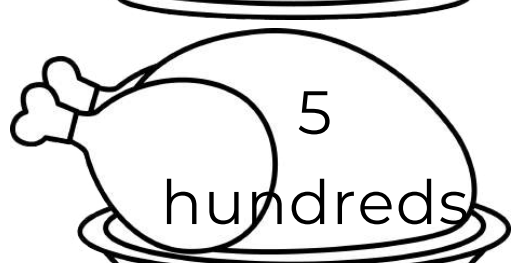
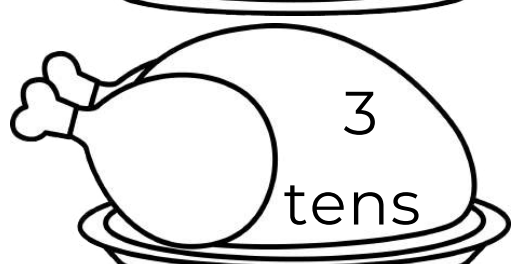
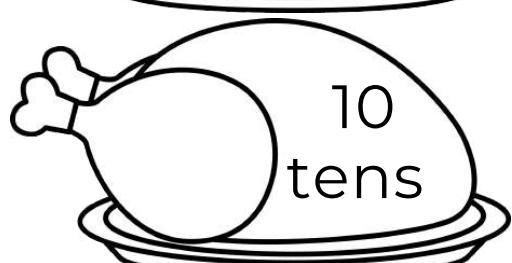
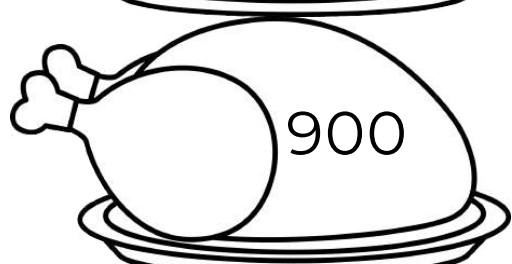
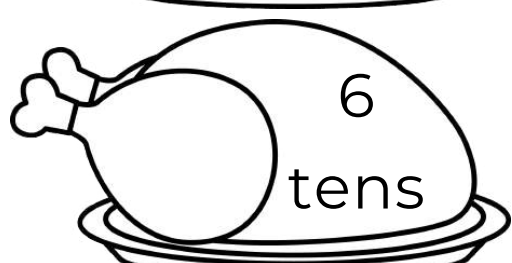
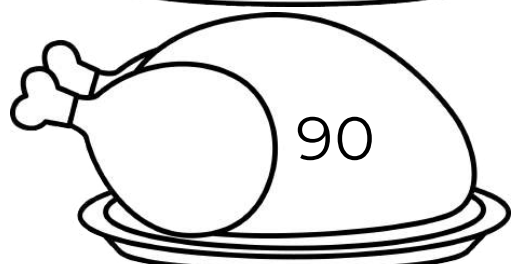
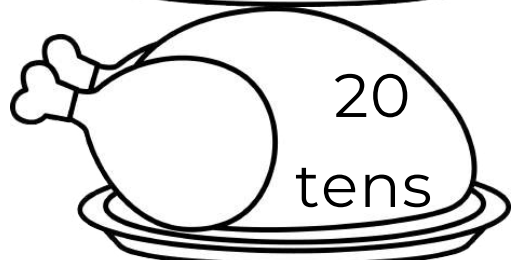
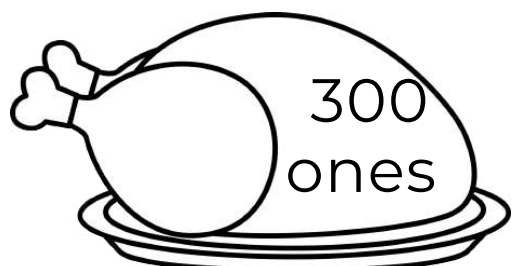


Name \_\_\_\_\_

Wednesday

# Place Value Equivalences


Directions: Find the equivalent values in each column. Color the turkeys with the same equivalent value the same color. Use a different crayon for each equivalent value.





Name \_\_\_\_\_

Wednesday




# Writing Titles

Begin a title of respect with a capital letter.  
Be sure to end Mr., Mrs., Ms., and Dr. with a period. Do not end Miss with a period.  
Directions: Roll a die and write one of the the names correctly in the column.

Name: mrs ann smith Fix it:  _____	Name: dr jane jones Fix it:  _____	Name: miss audrey smarts Fix it:  _____
Name: dr seuss Fix it:  _____	Name: mr tom turkey Fix it:  _____	Name: dr ralph baylor Fix it:  _____
Name: mr hammon Fix it:  _____	Name: miss mary marsh Fix it:  _____	Name: ms k e moffatt Fix it:  _____
Name: ms baxter Fix it:  _____	Name: mrs sally shells Fix it:  _____	Name: dr martin luther king Fix it:  _____
<div><div>•</div>or<div>••</div></div>	<div><div>••</div>or<div>••••</div></div>	<div><div>•••</div>or<div>••••</div></div>

Name \_\_\_\_\_


Thursday




# Word Problems

Directions: Solve the word problems. Be sure to show your work.


Joe the turkey has 41 feathers. George the turkey has 39 feathers. How many feathers do they have altogether?



Tracy the turkey found 23 of her babies. She has 55 babies. How many more does she still need to find?




The baby turkey ate 25 of her berries. She still has 58 berries left. How many berries did she start with?



The farmer's wife baked 64 pumpkin pies. The turkeys ate 23 of the pies. How many pies are left?





There were 89 turkeys on the farm. 27 turkeys escaped. How many turkeys are left?



Sam the turkey lost 16 feathers on Monday. On Tuesday, he lost 9 more feathers than on Monday. How many feathers did he lose on Tuesday?



Jenny has 18 baby turkeys. 9 of them are Beth's. She still needs to feed the turkeys. She spent 27 minutes doing her chores. It takes 16 minutes to feed all of the turkeys. How much time will it take her to complete all of her chores?





Name \_\_\_\_\_

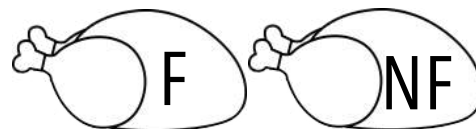
Thursday

# Fiction and Nonfiction Text

Directions: Read the description of each book.

Color the F turkey if it is a fiction book and color the NF turkey if it is a nonfiction book.

1. A book about Abraham Lincoln



2. A book about a dog who talked



3. A book that tells you how to plant a garden



4. A book about a cow who could fly



5. A book about Christopher Columbus



6. A book how to bake a cake








7. A book on facts about spiders



8. A book about a frog who turned into a prince



Directions: Look at your bookshelf. Write four fiction titles and four nonfiction titles.





Second Grade Reading Log

Date	Title & Author	Pages Read	Minutes Read

Parent Signature (Week 1):  
\_\_\_\_\_